



Education and Sport Development

Department of Education and Sport Development
Departement van Onderwys en Sportontwikkeling
Lefapha la Thuto le Tlhabololo ya Metshameko

NORTH WEST PROVINCE

NORTH WEST PROVINCIAL ASSESSMENT

GRADE 3

**LIFE SKILLS
NOVEMBER 2016**

MARKS: 40

TIME: 60 minutes

LEARNER: _____

SCHOOL: _____

AREA OFFICE: _____

DISTRICT: _____

This paper has 8 pages.

INSTRUCTIONS TO LEARNERS

1. Answer all questions in the spaces provided.
2. Use a neat and legible handwriting.
3. The duration for this test is 60 minutes.
4. Read all the questions carefully.
5. The teacher will lead you through the practice exercise before you start the test.

Practice exercise

1. Write true or false:
 - 1.1 Hurricane is a very strong wind that causes serious damage.
2. Circle the correct answer:
 - 2.1 We get wool from the
 - A Cow
 - B Sheep
 - C Chicken
3. Give one word for the answer:
 - 3.1 A very hot ball of gas.
.....

QUESTION 1

Circle the correct answer:

- 1.1 The child could die from drinking (water/paraffin).
- 1.2 (Mark Shuttleworth/Neil Armstrong) is the first South African to visit space.
- 1.3 Youth day is celebrated on the (25th December/16th June).
- 1.4 We (can't/can) see germs with our eyes.
- 1.5 Smoking can cause (stomach ache/cancer).
- 1.6 (Cabbage/Ice cream) is healthy to eat.

QUESTION 2

Are the following statements True or False?

- 2.1 The middle part of a locust is a thorax.....
- 2.2 The sun is a planet.....
- 2.3 A dog is a mammal.....
- 2.4 Never ever touch someone's blood.....
- 2.5 SAPS emergency number is 10111.....
- 2.6 Children have rights, but not responsibilities.....

QUESTION 3

Match Column A to Column B by filling in the correct letter to match the statement.

Question 3.1 is an example.

COLUMN A	ANSWER	COLUMN B
3.1 Recycle	F	A. An object from long ago
3.2 Carbohydrates		B. Makes juice to drink
3.3 Orange		C. The childline number
3.4 Knobkerrie		D. Food we should eat most
3.5 Jupiter		E. One of the disasters
3.6 Earthquake		F. Paper, tins and bottles
3.7 0800 05 55 55		G. The biggest planet

QUESTION 4

Give a one word answer:

4.1 Honey comes from these insects.

.....

4.2 We get ham and bacon from this farm animal.

.....

4.3 They need water, air, and sunlight to grow.

.....

4.4 The only planet with rings.


.....

4.5 It gives us light and heat for all life on earth.

.....

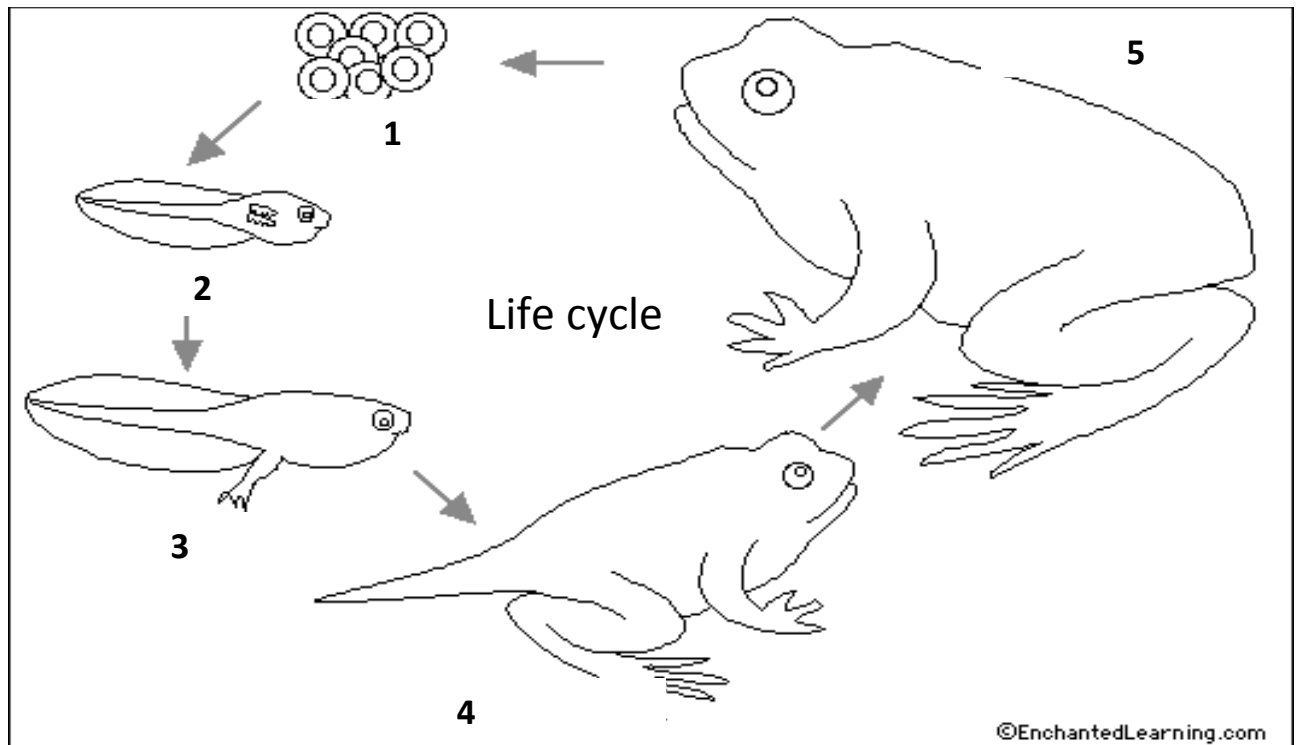
QUESTION 5

5.1 Label the body parts of the locust:



QUESTION 6

Look at the life cycle below and answer the questions:



6.1 It is the life cycle of a.....

6.2 Write down the following sentences in the correct order:


- The back legs grow.
- The front legs grow.
- The female frog lays eggs
- It is a mature frog.
- The young tadpole

1	
2	
3	
4	
5	

QUESTION 7

Look at the pictures below and answer the questions:

Types of Pollution



7.1 Name any three (3) kinds of pollution that you can see on the pictures

7.1.1

7.1.2

7.1.3

7.2 Write 3 sentences on how pollution can affect people, animals and fish in the water.

7.2.1

.....

7.2.2

.....

7.2.3

.....

GRAND TOTAL: 40