

GRADE 4
JUNE 2017

HERBERT HURD PRIMARY SCHOOL
GEOGRAPHY EXAM

50 MARKS

INSTRUCTIONS

- Read the questions very carefully.
- ALL questions to be answered on the lined page provided.
- RULE OFF after each section.
- Check ALL your answers.
- ENJOY the paper!



SECTION A: MATCH THE COLUMNS

Match the word in **COLUMN A** with the correct description in **COLUMN B**.

Write the **NUMBER** and matching **LETTER** only.

Example

IC

(5)

1. Atlantic Ocean	A. It is found between Asia and North America.
2. Arctic Ocean	B. Lines separating provinces from each other.
3. International border	C. It is found between South America and Africa.
4. Pacific Ocean	D. The most northern ocean.
5. Borders or boundaries	E. Lines separating provinces from neighbouring countries.

SECTION B: CHOOSE THE CORRECT ANSWER

Choose the **CORRECT ANSWER** from the choices between the **BRACKETS**.

Write the **NUMBER** and **ANSWER** only.

Example

There are 7 (countries/continents) in the world.

ANSWER : Continents

(10)

The smallest ocean in the world is the (1. Indian Ocean/Arctic Ocean) and it is found in the (2. Northern Hemisphere/Southern Hemisphere). A (3. Bay/Coastline) is the place where the land and sea meet. The Indian Ocean is found along South Africa's (4. eastern coastline/western coastline). There are (5. seven/nine) provinces in South Africa. The provincial capital of our province, the Eastern Cape, is (6. Bloemfontein/Bhisho). The leader of the Western Cape lives in (7. Polokwane/Cape Town). Lesotho is not a province of South Africa but it is a (8. continent/country) that is completely surrounded by South African provinces. If I went to visit a friend who lives in Mbombela, I would find myself in the province of (9. Gauteng/Mpumalanga). The smallest continent is (10. Australia/Antarctica) and it is found in the Southern Hemisphere.



SECTION C: TRUE OR FALSE

Write **TRUE** or **FALSE** for the following sentences.

If the sentence is **FALSE**, change the **INCORRECT WORD/S** to make the sentence **TRUE**.

1. Kimberley is the provincial capital of the Northern Cape.
2. A plan view is what you see when you look at something from the side.
3. A cartographer is an instrument used for finding direction.
4. North-East lies directly (exactly) opposite South-West on a compass.
5. An atlas is a model of the earth and is shaped like a ball.
6. Maps usually have a grid that lists and explains the symbols used on the map.

(10)

Example

A tree is a man-made landmark.
Answer = False. A tree is a NATURAL landmark.



SECTION D: GIVE ONE WORD

Write **ONE WORD** for the following descriptions.

Write the **NUMBER** and **WORD** only.

1. A settlement that has hotels, an airport and many people living in it.
2. The way someone or something is moving or pointing.
3. The smallest province.
4. A special feature that is made by nature OR people and that stands out easily in a place.
5. The largest continent.

(5)


Example

The second largest continent.
Answer : AFRICA

SECTION E: GRID REFERENCES

Look at the map and answer the questions that follow.

Write the **NUMBER** and **ANSWER** only.



Example

Give the GRID REFERENCE for the hospital.
Answer : B 1

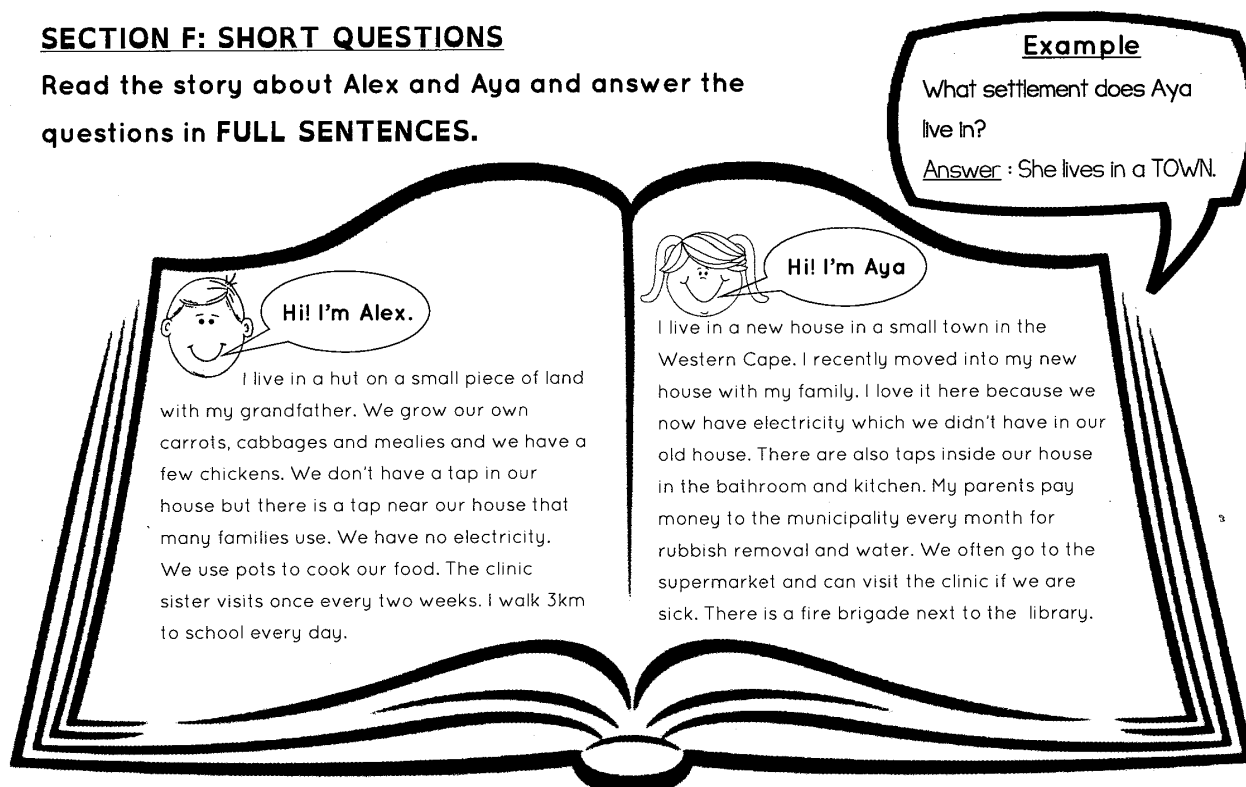


1. What street runs through A2, B2, C2 and D2?
2. In which street is the entrance to the school?
3. Can you buy groceries in D 1?
4. You want to borrow a book. What is the grid reference for the square where you would look?
5. What man-made landmark can be found in D 4?


(5)

SECTION F: SHORT QUESTIONS

Read the story about Alex and Aya and answer the questions in **FULL SENTENCES**.



1. What do you think Alex uses for light at night?
2. How do Alex and his grandpa get the food they need?
3. What settlement do you think Alex lives in?
4. Name **two** services that Aya's family receives in their town.
5. What is a municipality?
6. What kind of power or energy does Aya's family use to cook their food?
7. Name one crop that Alex and his grandpa grow to eat.




(8)

SECTION G: SIDE AND PLAN VIEWS

Look at the picture below. It is a side view of a teacup on a saucer.

Draw the **PLAN VIEW** of the picture on your lined page.



(2)

SECTION H: MAP SKILLS

Look at the map of the zoo and answer the questions that follow. Write the **NUMBER** and **ANSWER** only.

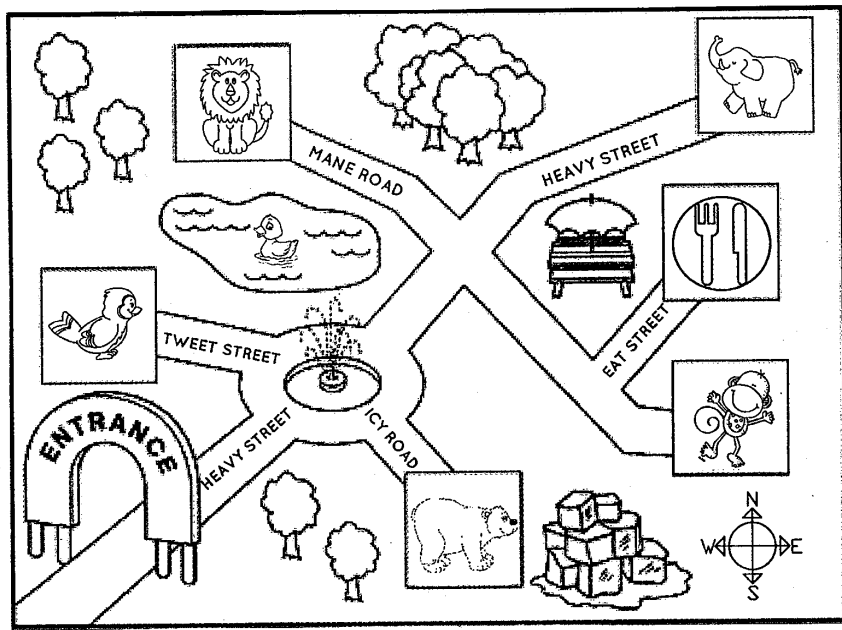
Example

You are at the monkey cages:

Name the building that is North of you.

Answer: Restaurant

(5)



KEY	
	PICNIC SPOT
	LION'S DEN
	ELEPHANT PIT
	AVIARY
	MONKEY CAGES
	POLAR BEAR CAMP
	RESTAURANT
	DUCK POND

You are at the ENTRANCE to the zoo:

- If you walk along Heavy Street, turn right at the circle and then take the first turn right again, what animals will you see?
- In which direction will you find the elephant pit?

You are now in MANE ROAD at the Lion's Den:

- Name the enclosure that is South West of you.
- In which direction must you walk if you want to see the monkeys next?

You are now at the RESTAURANT:

- In which direction must you walk if you want to eat your lunch at the picnic spot?



New words →

aviary = a large cage for keeping birds

enclosure = a closed space